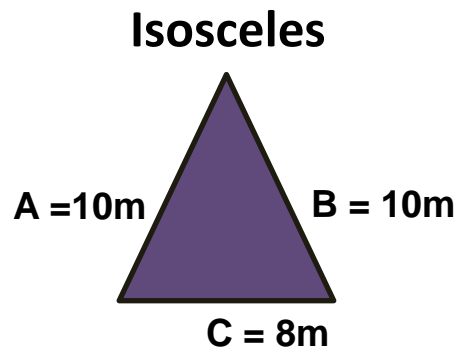


Answer 3: Shapes

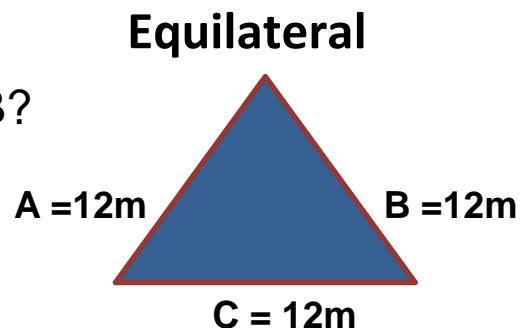
1. What is the length for side A?

Answer = 10m



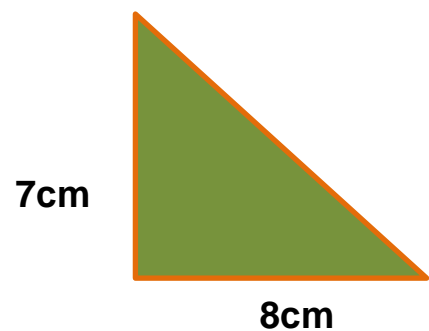
2. What is the length for side A and B?

Answer = 12m



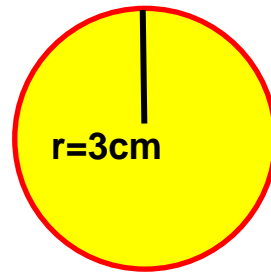
3. What is the area of the triangle?

Answer = 28cm^2




4. What is the area of the circle?

Answer = 28.26cm^2



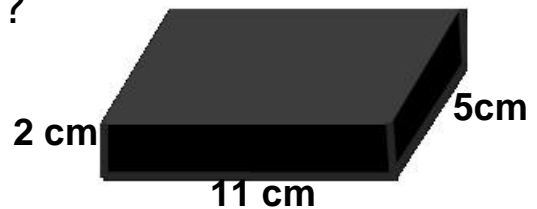
5. What is the area of the rectangle?

Answer = 45m^2



6. What is the volume of the cuboid?

Answer = 110cm^3



7. What is the volume of the cylinder?

Answer = 282.6m^3

